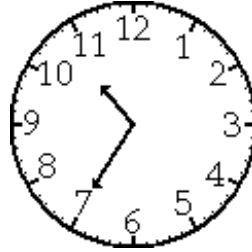


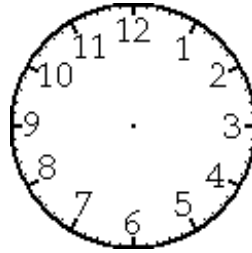
??

Crazy Clocks

The clock in your classroom is **one hour and 10 minutes slow**. Right now the clock says 10:35; here is what the clock looks like.



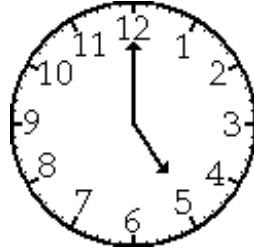
1. a. Your teacher hangs a clock with the correct time under the classroom clock. Draw the hands on this clock to show what time it really is.



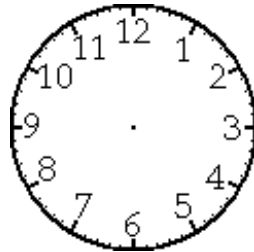
- b. Show what this time would look like on a digital clock.

The classroom next door also has a problem, but in their room the clock is

two hours and 30 minutes fast. That clock looks like this:



2. a. Draw the hands on the clock to show what time it really is.



- b. Write the time as it would look on a digital clock.
- c. You get out of school at 3:25. Using your answer in part **b** as the current time, how much longer do you have to wait until school gets out?
3. When you get home, you notice your VCR clock doesn't look right; it reads 3:75. Your mother asks you to reset the clock to the proper time. What will you set the clock to, and why?