








????????????????????????????????????????????????????????????

# Beach Day

The Smith family is planning to go to the beach sometime this week, but is not sure which day would be the best.

Willy Smith has a soccer game on Tuesday, and his sister is going to get an award for Math Camp on Friday.

Below is a chart of the weather forecast for this week.

Sun.	Mon.	Tues.	Wed.	Thu.	Fri.	Sat.
						
62° F	72° F	80° F	70° F	85° F	66° F	64° F

1. Using the story and the chart, choose the best beach day for the Smith family. Explain why you chose that day, including a description of the weather.

---

---

---

2. Explain your reasons for NOT choosing the other days.

---

---

---

---